

CBCS SCHEME

15ME61

Sixth Semester B.E. Degree Examination, Dec.2019/Jan.2020 Finite Element Method

Time: 3 hrs.

Max. Marks: 80

Note: Answer FIVE full questions, choosing ONE full question from each module.

Module-1

- 1 a. List the type of elements with neat sketch. (06 Marks)
- b. A simply supported beam subjected to point load at the centre. Derive an equation for maximum deflection using trigonometrically function by RR method. (10 Marks)

OR

- 2 a. List the advantages and disadvantages of FEM. (03 Marks)
- b. Explain Elasticity matrix [D] for stress and plain strain. (04 Marks)
- c. Explain simplex, complex and multiplex elements. (09 Marks)

Module-2

- 3 a. Derive the shape function, in natural coordinate system for:
 - (i) Constant strain triangle. (08 Marks)
 - (ii) 1D bar element. (08 Marks)
- b. Using two point Gaussian quadrature formula evaluate and compare with exact solution:

$$(i) \quad I = \int_{-1}^{+1} (1 + \xi + 2\xi^2 + 3\xi^3) d\xi$$

$$(ii) \quad I = \int_{-2}^{+2} (4 - y)^2 dy$$

(08 Marks)

OR

- 4 a. For the stepped bar shown in Fig. Q4 (a), determine the nodal displacement, element stresses and reaction at supports. (08 Marks)

$$E_1 = 70 \text{ GPa}; E_2 = 200 \text{ GPa}; P = 200 \text{ KN}; A_1 = 2400 \text{ mm}^2; A_2 = 600 \text{ mm}^2$$

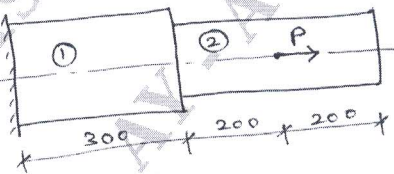


Fig. Q4 (a)

- b. A plane truss shown in Fig. Q4 (b), determine nodal displacements, stresses in each element and reaction at supports. (08 Marks)

$$E = 200 \text{ GPa}; A_1 = 1200 \text{ mm}^2; A_2 = 1000 \text{ mm}^2; P = 50 \text{ KN}$$

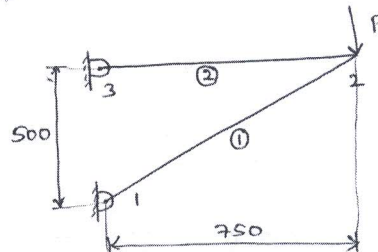


Fig. Q4 (b)

1 of 2

Important Note : 1. On completing your answers, compulsorily draw diagonal cross lines on the remaining blank pages.
2. Any revealing of identification, appeal to evaluator and/or equations written eg. 42+8 = 50, will be treated as malpractice.

Module-3

- 5 a. Derive the Hermite function of a beam element. (08 Marks)
 b. For the beam element shown in figure Q5 (b), determine the displacement and slope at the free end. Take $E = 70 \text{ GPa}$, $I = 4 \times 10^{-4} \text{ m}^4$ (08 Marks)


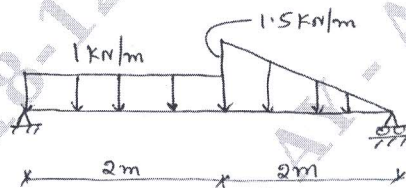


Fig. Q5 (b)

OR

- 6 a. Derive the stiffness matrix for a torsion element. (06 Marks)
 b. Find the deflection and slopes at the nodes for the aluminium beam shown in Fig. Q6 (b). (10 Marks)



$$E = 70 \text{ GPa}$$

$$I = 2 \times 10^{-6} \text{ m}^4$$

Fig. Q6 (b)

Module-4

- 7 a. With brief explanation obtain the rate equation that describes the rate of energy flow for the following conditions:
 (i) Conduction (ii) Convection (iii) Radiation (06 Marks)
 b. Derive the shape function of a 1 D bar element with temperature T_1 and T_2 at the nodes. (10 Marks)

OR

- 8 a. Determine the temperature distribution in the rectangular fin shown in Fig. Q8 (a). Neglect convection heat transfer and assume heat generated inside the fin as 500 W/m^3 (08 Marks)

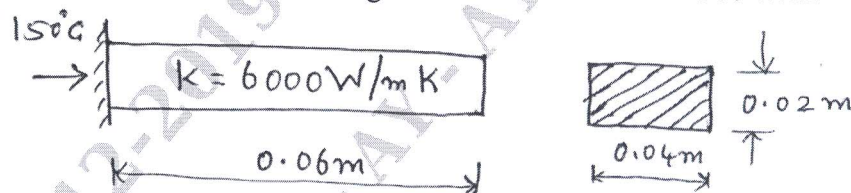


Fig. Q8 (a)

- b. Derive the stiffness matrix for fluid flow in 1 D bar element. (08 Marks)

Module-5

- 9 Derive the shape function for axisymmetric triangular element. (16 Marks)

OR

- 10 Derive the consistent mass matrix for the following:
 (i) 1 D bar element.
 (ii) 1 D truss element. (16 Marks)
