


CBCS SCHEME

USN

--	--	--	--	--	--	--	--	--	--



Third Semester B.E. Degree Examination, Dec.2019/Jan.2020

Data Structures and Applications

Time: 3 hrs.

Max. Marks: 100

Note: Answer any FIVE full questions, choosing ONE full question from each module.

Module-1

- 1 a. What is data structure? What are the various types of data structure? Explain. (05 Marks)
- b. What is structure? How it is different from array? Explain different types of structure declaration with examples and give differences between Union and Structure. (10 Marks)
- c. Define pointers. How to declare and initialize pointers, explain with example. (05 Marks)

OR

- 2 a. Explain dynamic memory allocation functions in detail. (06 Marks)
- b. Write the Knuth Morris Pratt pattern matching algorithm and apply the same to search the pattern 'abcdabcy' in the text: 'abcxabcdabxabcdbcdabcy' (08 Marks)
- c. Write a C program to:
 - (i) Comparing strings
 - (ii) Concatenate two strings(06 Marks)

Module-2

- 3 a. Define stack. Give the implementation of push, pop and display functions. Include check for empty and full conditions. (07 Marks)
- b. Write the postfix form of the following expressions using stack:
 - (i) $A \$ B * C - D + E | F | (G + H)$
 - (ii) $A - B | (C * D \$ E)$(06 Marks)
- c. Write an algorithm to evaluate a postfix expression and apply the same for the given postfix expression. $ABC - D * + E \$ F +$ and assume $A = 6, B = 3, C = 2, D = 5, E = 1$ and $F = 7$. (07 Marks)

OR

- 4 a. Define recursion. Write a recursive functions for the following:
 - (i) Factorial of a number
 - (ii) Tower of Hanoi(07 Marks)
- b. What is the advantage of circular queue over ordinary queue? Write a C program to simulate the working of circular queue of integers using array. Provide the following operations:
 - (i) Insert
 - (ii) Delete
 - (iii) Display(08 Marks)
- c. Write a note on Dequeue and priority queue. (05 Marks)

Module-3

- 5 a. What is a linked list? Explain the different types of linked lists with neat diagram. (07 Marks)
- b. Write a C function to insert a node at front and delete a node from the rear end in a circular linked list. (08 Marks)
- c. Write a C function for the concatenation of two doubly linked lists. (05 Marks)

OR

- 6 a. Describe the doubly linked lists with advantages and disadvantages. Write a C function to delete a node from a circular doubly linked list with header node. (08 Marks)
- b. For the given sparse matrix, give the diagrammatic linked representation. (04 Marks)

$$a = \begin{bmatrix} 0 & 1 & 2 \\ 3 & 0 & 0 \\ 0 & 0 & 0 \end{bmatrix}$$

- c. Write a C function to add two-polynomials represented as circular list with header node. (08 Marks)

Module-4

- 7 a. What is a tree? With suitable example, define: (09 Marks)
- Binary tree
 - Level of the binary tree
 - Complete binary tree
 - Degree of the tree
- b. Write the C routines to traverse the tree using: (06 Marks)
- Pre-order traversal
 - Post-order traversal.
- c. For the given data, draw a binary search tree and show the array and linked representation of the same: 100, 85, 45, 55, 110, 20, 70, 65. (05 Marks)

OR

- 8 a. What is the advantage of the threaded binary tree over binary tree? Explain the construction of threaded binary tree for 10, 20, 30, 40 and 50. (07 Marks)
- b. Define expression tree. For a tree given in Fig.Q8(b) traverse the tree using in-order, preorder and post-order traversals.

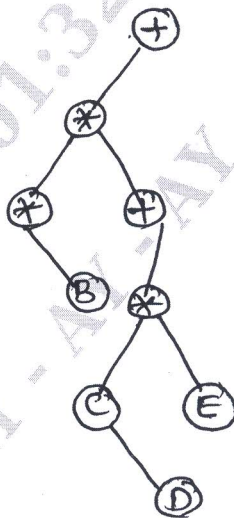


Fig.Q8(b)

- c. Construct a binary search tree by using the following in-order and preorder traversals: (06 Marks)
- Inorder : BCAEDGHI
- Preorder : ABCDEFGHI

Module-5

- 9 a. Define graph. For the given graph, show the adjacency matrix and adjacency list representation of the graph [Ref. Fig.Q9(a)]

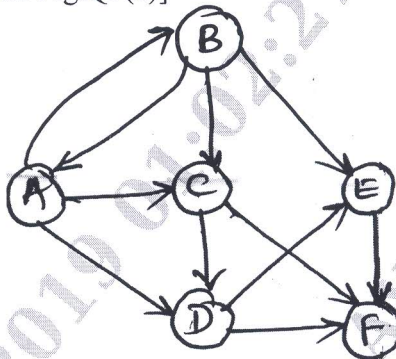


Fig.Q9(a)

(05 Marks)

- b. What are the methods used for traversing a graph? Explain any one with example and write C function for the same. (08 Marks)
- c. Write a C function for insertion sort. Sort the following list using insertion sort:
50, 30, 10, 70, 40, 20, 60 (07 Marks)

OR

- 10 a. What is collision? What are the methods to resolve collision? Explain linear probing with an example. (07 Marks)
- b. Explain in detail about static and dynamic hashing. (06 Marks)
- c. Briefly explain basic operations that can be performed on a file. Explain indexed sequential file organization. (07 Marks)
