

Third Semester B.E. Degree Examination, Dec.2019/Jan.2020
Analog Electronic Circuits

Time: 3 hrs.

Max. Marks: 80

Note: Answer any FIVE full questions, choosing ONE full question from each module.

Module-1

- 1 a. Explain the dc analysis of emitter stabilized bias circuit. State its advantages and disadvantages. (06 Marks)
- b. Obtain an expression for $S_{V_{BE}}$ OR S' for voltage divider bias circuit. Also express relation between $S_{I_{CO}}$ (S) and $S_{V_{BE}}$ (S'). (10 Marks)

OR

- 2 a. For voltage divider bias circuit $R_1 = 68K\Omega$, $R_2 = 6.8K\Omega$, $R_C = 3.3K\Omega$, $R_E = 1K\Omega$, $V_{CC} = 12V$ and $\beta = 100$. Determine the location of Q-point. Draw the circuit diagram. (10 Marks)
- b. For the circuit shown in Fig.Q.2(b), determine V_{CE} , V_E and I_E . Given that $R_B = 220K\Omega$, $R_E = 2.2K\Omega$, $V_{BB} = 5V$, $V_{EE} = -5V$, $\beta = 100$. (06 Marks)

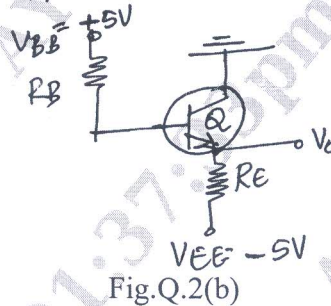


Fig.Q.2(b)

Module-2

- 3 a. State the conditions to operate transistor in saturation region, just out of saturation region and for active region. (03 Marks)
- b. For the common collector circuit shown in Fig.Q.3(b), $R_1 = 47K\Omega$, $R_2 = 4.7K\Omega$, $R_E = 3.3K\Omega$, $R_L = 10K\Omega$, $R_S = 1K\Omega$, $h_{ic} = 1.2K\Omega$, $h_{fc} = -101$, $h_{rc} = 1$ and $h_{oc} = 25\mu A/V$. Determine A_i , Z_i , A_v and A_{vs} . How do you justify your results? Use exact h-parameter model. (10 Marks)

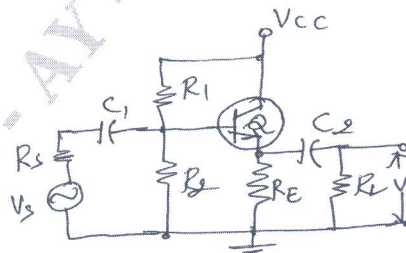


Fig.Q.3(b)

- c. State and explain the conditions to apply approximate h-parameter model for small signal equivalent circuit. (03 Marks)

Important Note : 1. On completing your answers, compulsorily draw diagonal cross lines on the remaining blank pages.
 2. Any revealing of identification, appeal to evaluator and/or equations written eg, 42+8 = 50, will be treated as malpractice.

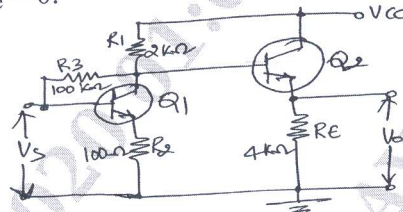
OR

- 4 a. Consider a hybrid II model for CE stage. Explain the variation of current gain vs frequency. Obtain an expression for cut off frequency f_{β} . (10 Marks)
 b. The short circuit CE current gain of transistor is 50 at a frequency of 5MHz, if $f_{\beta} = 300\text{kHz}$, determine f_T , h_{fe} and $|A_i|$ when $f = 10\text{MHz}$. (06 Marks)

Module-3

- 5 a. For the 2-stage cascade amplifier shown in Fig.Q.5(a), calculate A_i , A_v , Z_i , Z_o . Given $h_{ie} = 1.1\text{K}\Omega$, $h_{fe} = 50$, $h_{re} = h_{oe} = 0$. (10 Marks)

Fig.Q.5(a)

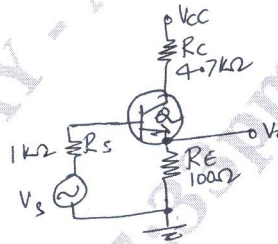


- b. What is a CASCODE amplifier? Draw the circuit of CASCODE amplifier. State its advantage. (06 Marks)

OR

- 6 a. Obtain an expression for transfer gain and stability of gain in negative feedback amplifier. (08 Marks)
 b. For the voltage series feedback amplifier shown in Fig.Q.6(b), calculate D , A_{vf} , Z_{if} and Z'_{of} . (08 Marks)

Fig.Q.6(b)



Module-4

- 7 a. Derive an expression for second harmonic distortion and power output due to distortion in a power amplifier. Use 3-point method. (10 Marks)
 b. A complementary push pull amplifier has capacitive couple load, $R_L = 8\Omega$, $V_{CC} = \pm 12\text{V}$, find $P_{ac\text{max}}$, P_D of each transistor and conversion efficiency. (06 Marks)

OR

- 8 a. Obtain an expression for frequency of oscillations in Hartley oscillator. (10 Marks)
 b. A crystal has $\alpha = 0.1\text{H}$, $C = 0.01\text{pF}$, $R = 10\text{K}\Omega$, $C_M = 1\text{pF}$. Find f_s and Q-factor. Also state Barkhausen criteria for sustained oscillations. (06 Marks)

Module-5

- 9 a. List the important features of FET and state its drawback also. (06 Marks)
 b. For the voltage divider bias circuit of FET, $R_D = 1.2\text{K}\Omega$, $R_S = 2\text{K}\Omega$, $R_1 = 20\text{K}\Omega$, $R_2 = 10\text{K}\Omega$, $V_{DD} = 12\text{V}$, $I_{DSS} = 12\text{mA}$, $V_P = -4\text{V}$, determine I_D , V_{GS} , V_G , V_{DS} and V_S . Draw the circuit diagram. (10 Marks)

OR

- 10 a. Consider JFET with self bias having unbypassed R_S . Obtain expression for Z_i , Z_o and A_v . Draw the circuit diagram and small signal circuit also. (10 Marks)
 b. Explain the differences between depletion type and enhancement type MOSFETS. (06 Marks)
