


CBCS SCHEME



USN

15EC43

Fourth Semester B.E. Degree Examination, Jan./Feb. 2023 Control Systems

Time: 3 hrs.

Max. Marks: 80

Note: Answer any FIVE full questions, choosing ONE full question from each module.

Module-1

- 1 a. Explain any two effects of feedback on control systems. (04 Marks)
- b. Inspect the mechanical system shown in Fig. Q1 (b) to,
 - (i) Draw the mechanical network.
 - (ii) Write differential equations governing the dynamic behavior of the system.
 - (iii) Draw force-voltage analogous electric network of the system.

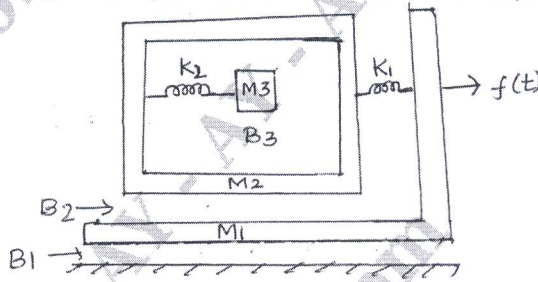


Fig. Q1 (b)

(08 Marks)

- c. Evaluate the transfer function of the system shown in Fig. Q1 (c) using Block diagram Reduction Algebra.

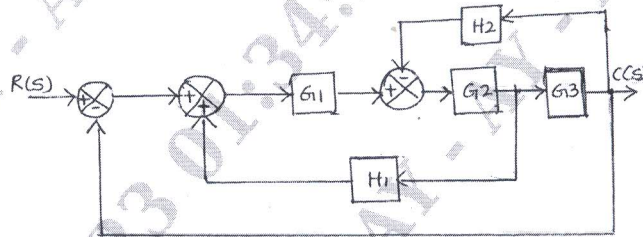


Fig. Q1 (c)

(04 Marks)

OR

- 2 a. Define :
 - (i) Open loop control system and closed loop control systems.
 - (ii) Linear and Non-Linear control systems. (04 Marks)
- b. Derive the transfer function of the system shown in Fig. Q2 (b)-(i) and Fig. Q2 (b)-(ii) and hence show that they are analogous to each other.

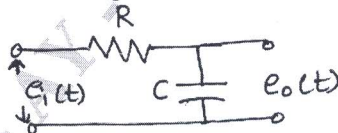


Fig. Q2 (b)-(i)

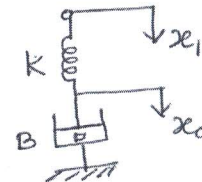


Fig. Q2 (b)-(ii)

(06 Marks)

Important Note : 1. On completing your answers, compulsorily draw diagonal cross lines on the remaining blank pages.
2. Any revealing of identification, appeal to evaluator and /or equations written eg. 42+8 = 50, will be treated as malpractice.

- c. Draw the signal flow graph of the block diagram shown in Fig. Q2 (c). Evaluate the transfer function using Mason's Gain formula.

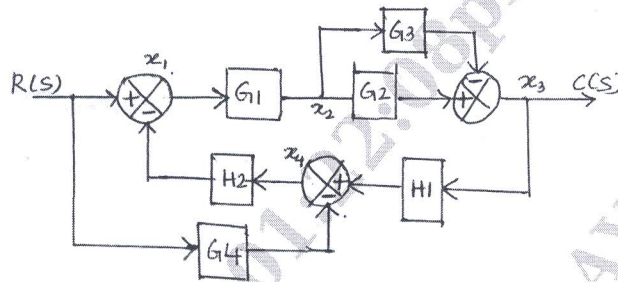


Fig. Q2 (c)

(06 Marks)

Module-2

- 3 a. Define the time domain specifications : Rise Time - t_r , Peak overshoot - t_p , Settling time - t_s , Steady state error - $e_{ss}(t)$ (04 Marks)
- b. For the unity feedback control system with $G(s) = \frac{125}{s(s+10)}$. Find (i) Peak overshoot (ii) Settling time for unit step input (iii) Steady state error an input of $5u(t)$. (06 Marks)
- c. For the closed loop system with $G(s) = \frac{1}{(s+5)}$ and $H(s) = 5$. Evaluate the generalized error coefficients and find error series. (06 Marks)

OR

- 4 a. Explain PID controller with neat block diagram. (04 Marks)
- b. The overall transfer function of a unity feedback system is given by $\frac{C(s)}{R(s)} = \frac{10}{s^2 + 6s + 10}$. Evaluate the values of error constants. Also find the steady state error for the input $r(t) = 1 + t + t^2$. (06 Marks)
- c. Obtain the rise time, peak time, maximum peak overshoot and settling time of the unit step response of a closed loop system given by, $\frac{C(s)}{R(s)} = \frac{16}{s^2 + 2s + 16}$ (06 Marks)

Module-3

- 5 a. Apply Routh Hurwitz criterion to determine the stability of the system whose characteristic equation is given by, $s^5 + 2s^4 + 3s^3 + 6s^2 + 5s + 3 = 0$ (08 Marks)
- b. The loop transfer function of a feed back control system is given by $G(s)H(s) = \frac{K(s+6)}{s(s+4)}$. (i) Sketch root locus plot with 'K' as variable parameter and show that loci of complex roots are part of a circle. (ii) Determine the break away and break in point, if any. (08 Marks)

OR

- 6 a. A unity feedback control system has open loop transfer function, $G(s) = \frac{K(s+13)}{s(s+3)(s+7)}$. Evaluate the range of K for which, the closed system is stable. (06 Marks)
- b. Sketch the root locus for a unity feedback system with open loop transfer function, $G(s) = \frac{K}{s(s^2 + 8s + 32)}$. From the plot find the range of K for which the system is stable. (10 Marks)

Module-4

- 7 a. Sketch the Bode plot showing the magnitude in decibels and phase angle in degrees as a function of log frequency for the transfer function given by,

$$G(s) = \frac{10}{s(1 + 0.5s)(1 + 0.1s)}$$

and hence determine the gain margin and phase margin of the system. (10 Marks)

- b. The closed loop transfer function of a second order system is, $\frac{C(s)}{R(s)} = \frac{\omega_n^2}{s^2 + 2\tau\omega_n s + \omega_n^2}$; where τ = damping ratio and ω_n = undamped natural frequency. Obtain an expression for Resonant Peak - M_r . (06 Marks)

OR

- 8 a. The open loop transfer function of an unity feedback system is given by,

$$G(s)H(s) = \frac{5}{s(s+1)(s+2)}$$

Apply Nyquist stability criteria to assess the stability of the system. (10 Marks)

- b. For the Bode plot shown in Fig. Q8 (b), evaluate the transfer function of the system.

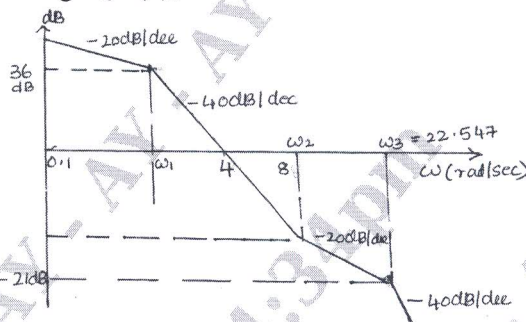


Fig. Q8 (b) (06 Marks)

Module-5

- 9 a. A sampled data system is described by the transfer function, $M(z) = \frac{y(s)}{R(z)} = \frac{1}{z^2 + a_1 z + a_2}$;

$a_1 = -\frac{3}{4}$ and $a_2 = \frac{1}{8}$; Find the response $y(k)$ to the input, (i) $r(k) = \delta(k)$ (ii) $r(k) = u(k)$

(06 Marks)

- b. For the system shown in Fig. Q9 (b). Evaluate the state equations.

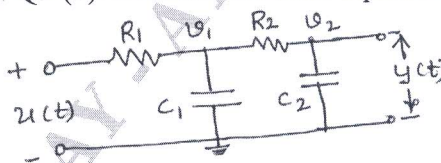


Fig. Q9 (b) (10 Marks)

OR

- 10 a. For the matrix given find the diagonalisation matrix.

$$A = \begin{bmatrix} 3 & -2 \\ -1 & 2 \end{bmatrix}$$

(10 Marks)

- b. State the properties of state transition matrix.

(06 Marks)
