

USN									
-----	--	--	--	--	--	--	--	--	--

Third Semester B.E. Degree Examination, Jan./Feb. 2023 Control Systems

Time: 3 hrs.

Max. Marks: 100

Note: Answer any FIVE full questions, choosing ONE full question from each module.

Module-1

- 1 a. Define the following terminologies used in control systems i) plant ii) process
iii) command input iv) Reference input v) Disturbance. (05 Marks)
- b. Find the transfer function $x_1(s)/F(s)$ for the mechanical system shown in Fig Q1(b)

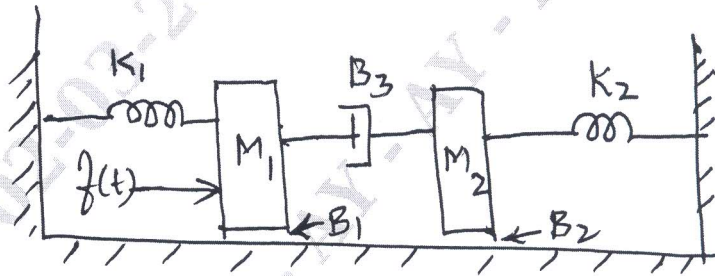


Fig Q1(b)

(07 Marks)

- c. For the mechanical system shown in Fig Q1(c), draw electrical network based on Torque – voltage analogy.




Fig Q1(c)

(08 Marks)

OR

- 2 a. List out block diagram reduction technique rules? Draw necessary diagrams and equations. (10 Marks)
- b. For the mechanical system shown in Fig Q2(b) i) Draw mechanical network ii) Obtain equations of notation iii) Draw an electrical network based on force current analogy.

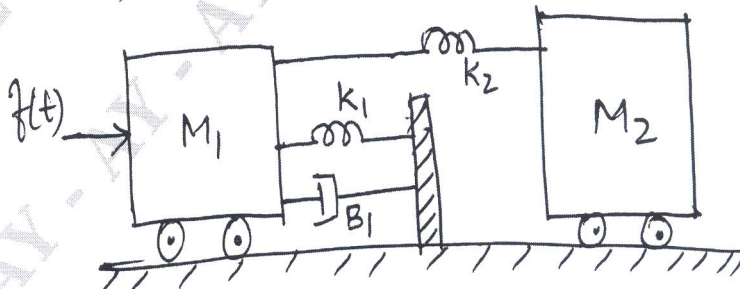


Fig Q2(b)

(10 Marks)

Important Note : 1. On completing your answers, compulsorily draw diagonal cross lines on the remaining blank pages.
2. Any revealing of identification, appeal to evaluator and /or equations written eg. 42+8 = 50, will be treated as malpractice.

Module-2

- 3 a. Find $C(S)/R(S)$ by Mason's gain formula, for the signal flow graph shown in Fig Q3(a).

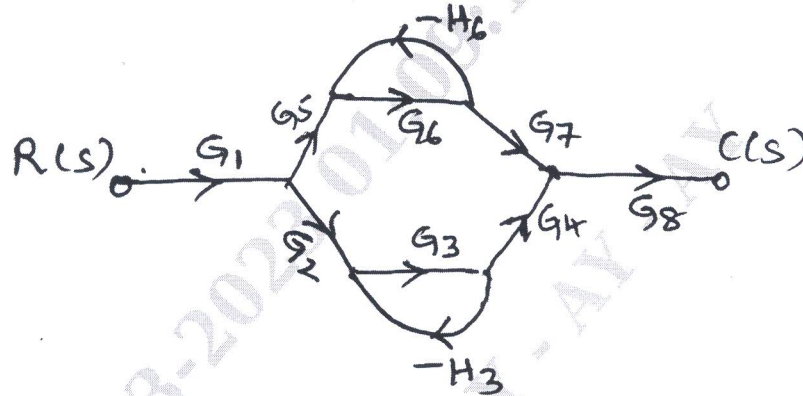


Fig Q3(a)

(10 Marks)

- b. Derive an expression of unit response of a second order system for underdamped case.

(10 Marks)

OR

- 4 a. Define any five time response specifications of under damped second order system. Draw necessary response output graph. (08 Marks)

- b. The open loop transfer function of a unity feedback control system is given by

$$G(s) = \frac{K}{S(ST+1)}$$

- i) By chart factor the amplifier gain 'K' should be multiplied so that damping ratio is increased from 0.2 to 0.8.
 ii) By what factor the time constant T should be multiplied so that the damping ratio is reduced from 0.6 to 0.3. (12 Marks)

Module-3

- 5 a. Define the following i) Stable system ii) Unstable system iii) marginally stable system. (06 Marks)

- b. Find the range of values of 'K' so that system with the following characteristics equations will be stable $F(s) = s(s^2 + s + 1)(s + 4) + K = 0$. (08 Marks)

- c. Investigate the stability of a closed loop system whose characteristics equation is given by $s^5 + 3s^4 + 7s^3 + 20s^2 + 6s + 15 = 0$. (06 Marks)

OR

- 6 a. What are the advantages of frequency domain approach? (06 Marks)

- b. For unity feedback system $G(s) = \frac{K}{s(1+0.4s)(1+0.25s)}$, find the range of 'K' marginal value of 'K' and frequency of sustained oscillations. (07 Marks)

- c. The characteristic equation of a system is given by $s^4 + ks^3 + 2s^2 + (k+1)s + 10 = 0$. Determine: i) the range of 'K', so that the system is stable and ii) the value of K so that system is marginally stable. (07 Marks)

Module-4

- 7 a. Explain the method of calculation the breakaway points and centroid. (06 Marks)
 b. Sketch the complete root locus of system having

$$G(s)H(s) = \frac{K}{s(s+1)(s+2)(s+3)}. \quad (14 \text{ Marks})$$

OR

- 8 a. Explain the concept of gain margin and phase margin, and how these values help in studying relative stability. (06 Marks)
 b. For a unity feedback system $G(s) = \frac{800(s+2)}{s^2(s+10)(s+40)}$, sketch the bode plot and comment on stability. (14 Marks)

Module-5

- 9 a. List the advantages of state space techniques and properties of state transition matrices. (10 Marks)
 b. Obtain an appropriate state model for a system represented by an electric circuit as shown in Fig Q9(b)

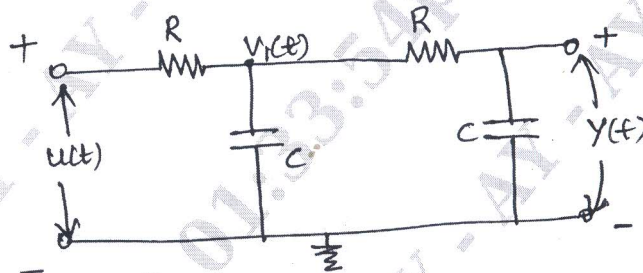


Fig Q9(b)

(10 Marks)

OR

- 10 a. Explain the concept of state and state variables. (04 Marks)
 b. Find the state transition matrix for a system whose system matrix is given by

$$A = \begin{bmatrix} 1 & 0 \\ 1 & 1 \end{bmatrix} \quad (08 \text{ Marks})$$

- c. Represent the differential equation given below in a state model

$$\frac{d^3y}{dt^3} + \frac{3d^2y}{dt^2} + \frac{6dy}{dt} + 7y(t) = 2u(t). \quad (08 \text{ Marks})$$

* * * * *