

USN

--	--	--	--	--	--	--	--

15MT34

Third Semester B.E. Degree Examination, June/July 2023

Control Systems

Time: 3 hrs.

Max. Marks: 80

Note: Answer any FIVE full questions, choosing ONE full question from each module.

Module-1

- 1 a. Define control systems. Distinguish between open loop and closed loop control systems. (08 Marks)
- b. In the circuit below Fig.1(b). Determine the transfer function $E_o(S)/E_i(S)$.

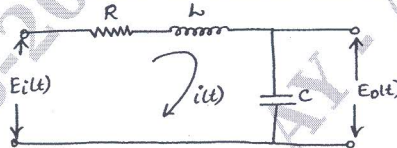


Fig. Q1(b)

(08 Marks)

OR

- 2 a. Write the differential equations for the mechanical rotational system shown in Fig.Q2(a). Obtain the torque-current analogy of system. (08 Marks)

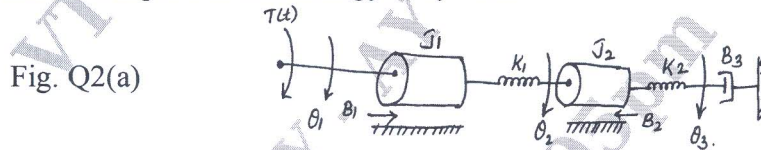


Fig. Q2(a)

- b. Reduce the block diagram shown in Fig.Q2(b) to its simple form and hence obtain $C(s)/R(s)$.

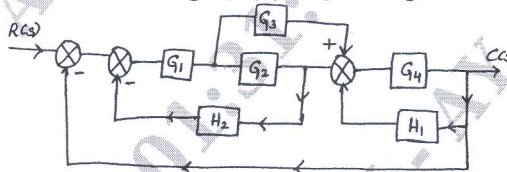


Fig. Q2(b)

(08 Marks)

Module-2

- 3 a. State and explain the Mason gain formula. (08 Marks)
- b. Find the transfer function $\frac{C(s)}{R(s)}$ using signal flow graph.

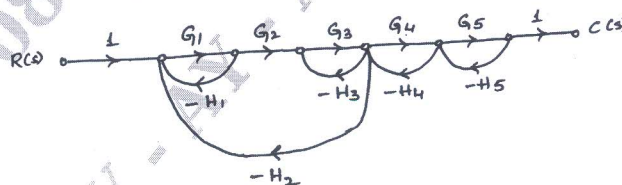


Fig. Q3(b)

(08 Marks)

OR

- 4 a. A system is given by differential equation, $\frac{d^2y}{dt^2} + 4\frac{dy}{dt} + 8y = 8x$ where y = output and x = input. Determine all time domain specifications for unit step input. (08 Marks)

Important Note : 1. On completing your answers, compulsorily draw diagonal cross lines on the remaining blank pages.
2. Any revealing of identification, appeal to evaluator and /or equations written eg, 42+8 = 50, will be treated as malpractice.

- b. Consider unity feedback control system whose open loop transfer function is given by $G(s) = \frac{0.4s+1}{s(s+0.6)}$. Calculate rise time, peak overshoot, peak time and settling time. (08 Marks)

Module-3

- 5 a. Using Routh criteria determine the stability of the following :
- $s^6 + 3s^5 + 4s^4 + 6s^3 + 5s^2 + 3s + 2 = 0$.
 - $s^6 + 2s^5 + 8s^4 + 12s^3 + 20s^2 + 16s + 16 = 0$. (08 Marks)
- b. Sketch the complete root locus of system having $G(s)H(s) = \frac{K}{s(s+1)(s+2)(s+3)}$. Comment on stability. (08 Marks)

OR

- 6 a. State and explain Routh Hurwitz criterion of stability. (08 Marks)
- b. $S^6 + 4s^5 + 3s^4 - 16s^2 - 64s - 48 = 0$. Find the number of roots of this equation with positive real part, zero real part and negative real part. (08 Marks)

Module-4

- 7 a. A system of third order shows resonance peak of 2 and resonance frequency of 3 rad/sec. Determine the transfer function of equivalent second order system and hence find T_r , T_p , T_s and % overshoot. (08 Marks)
- b. For a particular unity feedback, $G(s) = \frac{242(s+5)}{s(s+1)(s^2+5s+121)}$. Sketch the bode plot. Find ω_{gc} and ω_{pc} . G.M, P.M. (08 Marks)

OR

- 8 a. Consider type 2 system with transfer function $G(s)H(s) = \frac{1}{s^2(1+T_s)}$. Obtain its polar plot. (08 Marks)
- b. For a certain control system $G(s)H(s) = \frac{k}{s(s+2)(s+10)}$. Sketch the Nyquist plot and hence calculate the range of values of k for stability. (08 Marks)

Module-5

- 9 a. Define : i) State ii) State Vector iii) State Space iv) State Variable. (08 Marks)
- b. Derive the transfer function for state model. (08 Marks)

OR

- 10 a. Determine the transfer function matrix for MIMO system given by $\begin{bmatrix} \dot{x}_1 \\ \dot{x}_2 \end{bmatrix} = \begin{bmatrix} 0 & 3 \\ -2 & -5 \end{bmatrix} \begin{bmatrix} x_1 \\ x_2 \end{bmatrix} = \begin{bmatrix} 1 & 1 \\ 1 & 1 \end{bmatrix} \begin{bmatrix} u_1 \\ u_2 \end{bmatrix}$; $\begin{bmatrix} y_1 \\ y_2 \end{bmatrix} = \begin{bmatrix} 2 & 1 \\ 1 & 0 \end{bmatrix} \begin{bmatrix} x_1 \\ x_2 \end{bmatrix}$ (08 Marks)
- b. Obtain the time response of the following system.
- $$\begin{bmatrix} \dot{x}_1 \\ \dot{x}_2 \end{bmatrix} = \begin{bmatrix} 1 & 0 \\ 1 & 1 \end{bmatrix} \begin{bmatrix} x_1 \\ x_2 \end{bmatrix} + \begin{bmatrix} 1 \\ 1 \end{bmatrix} u(t)$$
- Where $u(t)$ is the unit step occurring at $t = 0$ and $x^T(0) = [1 \ 0]$. (08 Marks)
