



**First Semester MCA Degree Examination, June/July 2023**  
**Design and Analysis of Algorithm**

Time: 3 hrs.

Max. Marks: 100

*Note: 1. Answer any FIVE full questions, choosing ONE full question from each module.  
 2. M : Marks , L: Bloom's level , C: Course outcomes.*

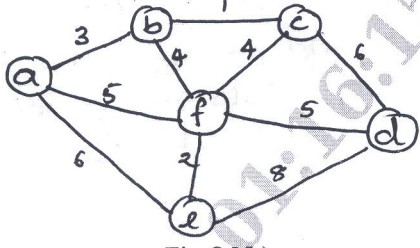
Module - 1			M	L	C
Q.1	a.	List out important problem types. Explain any three of them.	10	L1	CO1
	b.	What is asymptotic notation? List and explain the asymptotic notation	10	L1	CO1
<b>OR</b>					
Q.2	a.	List out the fundamental data structures. Explain any two of them.	10	L1	CO1
	b.	What is an algorithms? List the algorithm specifications and explain.	5	L1	CO1
	c.	Prove the following theorem. If $t_1(n) \in O(g_1(n))$ and $t_2(n) \in O(g_2(n))$ then $t_1(n) + t_2(n) \in O(\max\{g_1(n), g_2(n)\})$	5	L2	CO2
<b>Module - 2</b>					
Q.3	a.	Discuss Strassen's matrix multiplications and analyze. Also find the product of $A = \begin{bmatrix} 1 & 2 \\ 3 & 4 \end{bmatrix}$ $B = \begin{bmatrix} 2 & 3 \\ 4 & 5 \end{bmatrix}$ Using Strassen's matrix multiplication.	12	L2	CO2
	b.	Write an algorithm for quick sort and analyze its efficiency.	8	L3	CO3
<b>OR</b>					
Q.4	a.	Write algorithm for merge sort find the time complexity. Sort the following using merge sort. 8, 3, 2, 9, 7, 1, 5, 4.	10	L3	CO3
	b.	What do you mean by topological order of a graph? Find the topological order of the given graph by DFS and source removal method	10	L2	CO2

Fig Q4(b)

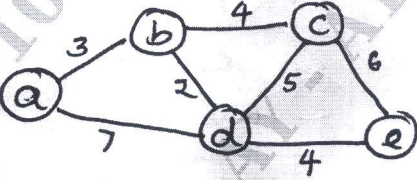
Module - 3			M	L	C
Q.5	a.	Write the Prim's algorithm to find minimal spanning tree. And apply the Prim's algorithm to find the minimal spanning tree for a given graph and find the cost of the spanning tree.	10	L3	CO3

Fig Q5(a)

Important Note : 1. On completing your answers, compulsorily draw diagonal cross lines on the remaining blank pages.  
 2. Any revealing of identification, appeal to evaluator and /or equations written eg. 42+8 = 50, will be treated as malpractice.

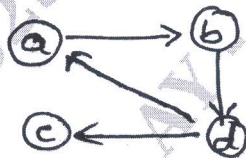
	<p>b. Write the Kruskal's algorithm. Find the minimum spanning tree for the given graph using Kruskal's algorithm.</p>  <p>Fig Q5(b)</p>	10	L3	CO3
--	---	----	----	-----

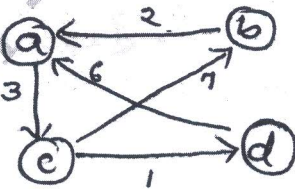
OR

Q.6	<p>a. Write the Dijkstra's algorithm to find single source shortest path problem. Apply Dijkstra's algorithm considering 'a' as the source vertex to find single source shortest path.</p>  <p>Fig Q6(a)</p>	10	L3	CO3
-----	---	----	----	-----

	<p>b. Define Huffman tree. Consider the five character alphabet with following probability.</p> <table border="1" data-bbox="532 1064 1031 1137"> <thead> <tr> <th>Character</th> <th>A</th> <th>B</th> <th>C</th> <th>D</th> <th>-</th> </tr> </thead> <tbody> <tr> <td>Probability</td> <td>0.35</td> <td>0.1</td> <td>0.2</td> <td>0.2</td> <td>0.15</td> </tr> </tbody> </table> <p>i) Construct Huffman tree                  ii) Construct the Huffman code for all characters                  iii) Encode DAD                  iv) Decode 100110110110111</p>	Character	A	B	C	D	-	Probability	0.35	0.1	0.2	0.2	0.15	10	L3	CO3
Character	A	B	C	D	-											
Probability	0.35	0.1	0.2	0.2	0.15											

Module - 4

Q.7	<p>a. Write the Warshalls's algorithm and find the transitive closure for the given graph.</p>  <p>Fig Q7(a)</p>	10	L2	CO2
-----	---	----	----	-----

	<p>b. Write the Floyd's algorithm and apply this algorithm to find all pair shortest path for the given diagram.</p>  <p>Fig Q7(b)</p>	10	L2	CO2
--	---	----	----	-----

OR																									
Q.8	a.	Discuss the knapsack problem by dynamic programming with respect to the following example.	12	L3	CO3																				
		<table border="1"> <thead> <tr> <th>Items</th> <th>Weight</th> <th>Value</th> </tr> </thead> <tbody> <tr> <td>1</td> <td>2</td> <td>12</td> </tr> <tr> <td>2</td> <td>1</td> <td>10</td> </tr> <tr> <td>3</td> <td>3</td> <td>20</td> </tr> <tr> <td>4</td> <td>2</td> <td>15</td> </tr> </tbody> </table> <p>Capacity <math>W = 5</math></p>	Items	Weight	Value	1	2	12	2	1	10	3	3	20	4	2	15								
Items	Weight	Value																							
1	2	12																							
2	1	10																							
3	3	20																							
4	2	15																							
	b.	Discuss optional Binary search trees and write its algorithm.	8	L1	CO1																				
Module – 5																									
Q.9	a.	Explain Backtracking. Describe the 4-Queen problem and discuss the possible solution.	10	L2	CO2																				
	b.	Explain P, NP and NP complete problem with example	10	L2	CO2																				
OR																									
Q.10	a.	Explain Brand and Bound technique solve the assignment problem using branch and bound technique. job $\rightarrow$ 1 2 3 4 $\downarrow$ person <table border="1"> <tbody> <tr> <td>9</td> <td>2</td> <td>7</td> <td>8</td> <td>a</td> </tr> <tr> <td>6</td> <td>4</td> <td>3</td> <td>7</td> <td>b</td> </tr> <tr> <td>5</td> <td>8</td> <td>1</td> <td>8</td> <td>c</td> </tr> <tr> <td>7</td> <td>6</td> <td>9</td> <td>4</td> <td>d</td> </tr> </tbody> </table>	9	2	7	8	a	6	4	3	7	b	5	8	1	8	c	7	6	9	4	d	10	L3	CO3
	9	2	7	8	a																				
6	4	3	7	b																					
5	8	1	8	c																					
7	6	9	4	d																					
	b.	What is state space tree? Draw the state space tree of the Back tracking algorithm applied to the instance $S = \{3, 5, 6, 7\}$ and $d = 15$ of the sub set sum problem.	10	L2	CO2																				

\*\*\*\*\*