

CBCS SCHEME

USN

--	--	--	--	--	--	--	--	--	--	--	--

18CS54

Fifth Semester B.E. Degree Examination, Dec.2023/Jan.2024 Automata Theory and Computability

Time: 3 hrs.

Max. Marks: 100

Note: Answer any FIVE full questions, choosing ONE full question from each module.

Module-1

- 1 a. Construct the DFSM for the following languages :
 - (i) $L = \{W \mid W \in \{a,b\}^* \mid W \text{ does not contain the substring a a b}\}$
 - (ii) $L = \{W \mid W \in \{a,b\}^* \text{ where } W \text{ ends either with a b or b a}\}$ (08 Marks)
- b. Minimize the given Fig. Q1 (b) DFSM by applying min DFSM method. (08 Marks)

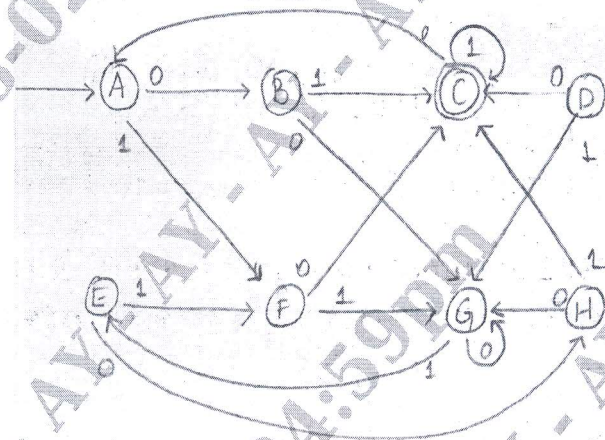


Fig. Q1 (b)

- c. Explain the operations on strings and languages. (04 Marks)

OR

- 2 a. By applying ndfsm to dfsm convert the given Fig. Q2 (a) DFSM to its equivalent DFSM. (10 Marks)

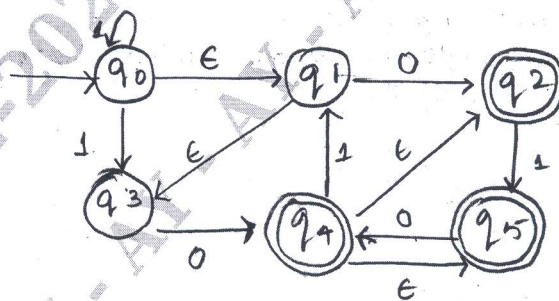


Fig. Q2 (a)

- b. Construct DFSM for the language,
 $L = \{W \mid W \in \{a,b\}^* \text{ where } W \text{ is having even number of a's and odd number of b's}\}$ (05 Marks)
- c. Explain the difference between DFSM and NDFSM with example. (05 Marks)

Important Note : 1. On completing your answers, compulsorily draw diagonal cross lines on the remaining blank pages.
2. Any revealing of identification, appeal to evaluator and /or equations written eg, 42+8 = 50, will be treated as malpractice.

Module-2

- 3 a. Illustrate that the regular languages are closed under union, concatenation and compliment. (10 Marks)
- b. State and prove pumping Lemma for regular languages and prove that the following languages are not regular.
- (i) $L = \{a^n b^n \mid n \geq 0\}$
- (ii) $L = \{WW^R \mid W \in \{a, b\}^*\}$ (10 Marks)

OR

- 4 a. Consider the FSM M given in Fig. Q4 (a). Use the fsmto regx heuristic method to construct a regular expression that describe L(m). (08 Marks)

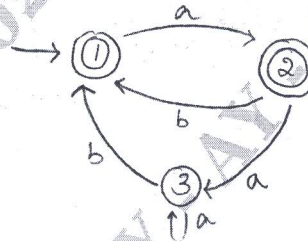


Fig. Q4 (a)

- b. Write the regular expression for the following languages ;
- (i) $L = \{a^{2n} b^{2m} \mid n \geq 0, m \geq 0\}$
- (ii) $L = \{a^n b^m \mid m \geq 1, n \geq 1, n + m \geq 3\}$
- (iii) $L = \{W \mid W \in \{a, b\}^* \text{ and } |W| \text{ is multiples of } 3\}$. (06 Marks)
- c. Draw a FSM for the given below regular expressions :
- (i) $(0+1)^* 0 (0+1)^* 0$
- (ii) $ab(a+b)^* a$ (06 Marks)

Module-3

- 5 a. Obtain a context free Grammar for the language :
- (i) $L = \{0^{2n} 1^m \mid n \geq 0, m \geq 0\}$
- (ii) $L = \{0^i 1^j 2^k \mid i = j \text{ or } j = k\}, i, j, k \geq 0$ (04 Marks)
- b. Convert the following CFG into CNF :
- $R = \{ A \rightarrow a \quad B \rightarrow b \mid bR$
 $A \rightarrow aB \quad C \rightarrow C \mid cC$
 $A \rightarrow BaC$
 $A \rightarrow BbC$
 $\}$ where A is the start symbol (06 Marks)
- c. Design a PDA to accept the language $L = \{a^n b^n \mid n \geq 0\}$, draw the transition diagram and show the string acceptance for $W=aaabbb$. (10 Marks)

OR

- 6 a. What is ambiguous grammar? Prove that the given grammar is ambiguous : $S \rightarrow (S) \mid SS \mid \epsilon$ (06 Marks)
- b. Design a PDA for the language $L = \{WCW^R \mid W \in \{a, b\}^*\}$ and draw the transition diagram and show the string acceptance for $W = a a b c b a a$. (10 Marks)

- c. Convert the following CFG to CNF

$$R = \{ \begin{array}{l} S \rightarrow XY \\ X \rightarrow A \\ A \rightarrow B/a \\ Y \rightarrow bT \\ T \rightarrow Y/C \\ \end{array} \}$$

(04 Marks)

Module-4

- 7 a. Design a Turing Machine to accept $L = \{0^n 1^n 2^n \mid n \geq 0\}$. Draw the transition diagram and show the moves made for the string $W = a a b b c c$. (10 Marks)
- b. Explain multitape Turing machine and prove that language accepted by multitape Turing machine is also accepted by singletape Turing machine. (10 Marks)

OR

- 8 a. Explain non-deterministic Turing machine and prove that there exists equivalent DTM. (10 Marks)
- b. Design a Turing machine for the language,
 $L = \{W \mid W \in \{a, b\}^* \text{ where } W \text{ is a string of palindrome of odd or even length}\}$.
 Draw the transition diagram. Show the string acceptance for $W = ababa$. (10 Marks)

Module-5

- 9 a. Explain post correspondence problem. (07 Marks)
- b. Explain Halting problem in Turing machine. (06 Marks)
- c. Explain recursively enumerable language. (07 Marks)

OR

- 10 Write short notes on : (20 Marks)
- a. Growth rate of function.
- b. Classes of P & NP
- c. Quantum computers.
- d. Church Turing Thesis
