

USN

--	--	--	--	--	--	--	--

Fourth Semester B.E. Degree Examination, Dec.2023/Jan.2024 Signals and Systems

Time: 3 hrs.

Max. Marks: 100

Note: Answer any FIVE full questions, choosing ONE full question from each module.

Module-1

- 1 a. Define signals and systems. Give the relevant examples. (05 Marks)
- b. Find the even and odd components of each of the following signals :
 - i) $x(t) = \cos(t) + \sin(t) + \sin(t)\cos(t)$
 - ii) $x(t) = 1 + t + 3t^2 + 5t^3 + 9t^4$
 - iii) $x(t) = 1 + \cos(t) + t^2 \sin(t) + t^3 \sin(t)\cos(t)$. (09 Marks)
- c. A triangular pulse signal $x(t)$ is depicted in Fig.Q1(c). Sketch each of the following signals derived from $x(t)$.
 - i) $y_1(t) = x(3t + 2)$
 - ii) $y_2(t) = x(-2t - 1)$
 - iii) $y_3(t) = x(2t - 4)$.

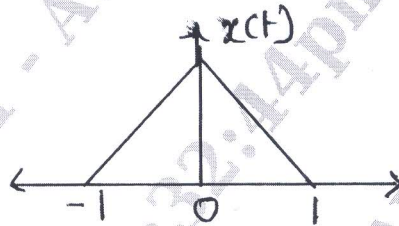


Fig.Q1(c)

(06 Marks)

OR

- 2 a. Explain the following properties of systems with suitable example :
 - i) Time – invariance
 - ii) Stability
 - iii) Linearity
 - iv) Causality. (08 Marks)
- b. Consider the following sinusoidal signals. Determine whether each $x(n)$ is periodic and if it is find its fundamental period.
 - i) $x(n) = 10 \sin(2n)$
 - ii) $x(n) = 15 \cos(0.2\pi n)$
 - iii) $x(n) = 5 \sin\left(\frac{6\pi n}{35}\right)$. (06 Marks)
- c. A discrete time system is given by $y(n) = n x(n)$. Determine its properties. (06 Marks)

Module-2

- 3 a. Derive the expression for convolution sum. (05 Marks)
- b. Find $y(n) = x(n) * h(n)$. where $x(n) = \{3, 5, -2, 4\}$ and $h(n) = \{3, 1, 3\}$. (05 Marks)
- c. Evaluate the convolution integral for a system with input $x(t)$ and impulse response $h(t)$, respectively given by $x(t) = u(t) - u(t - 4)$ and $h(t) = u(t) - u(t - 2)$. (10 Marks)

OR

- 4 a. Prove the following properties of convolution integral :
- Commutative
 - Associative
 - Distributive.
- (10 Marks)
- b. Investigate :
- Causality
 - Stability of the following systems :
- $h(n) = 2^n u(n-1)$
 - $h(n) = (0.5)^{|n|}$.
- (10 Marks)

Module-3

- 5 a. Find the step response of an LTI system represented by the impulse response :
 $h(n) = (1/2)^n u(n)$. (07 Marks)
- b. Find the step response of an LTI system whose impulse response is given by $h(t) = t^2 u(t)$. (07 Marks)
- c. Consider the periodic waveform :
 $x(t) = 4 + 2 \cos 3t + 3 \sin 4t$
- What is the value of T?
 - What is the total average power?
 - Find the complex Fourier co-efficient.
- (06 Marks)

OR

- 6 a. Find the Fourier coefficients for $x(t)$
 $x(t) = \cos\left(\frac{2\pi t}{3}\right) + 2 \cos\left(\frac{5\pi t}{3}\right)$. (08 Marks)
- b. Consider the rectangular pulse train shown in Fig.Q6(b). Using the derivative property. Find $x(k)$.

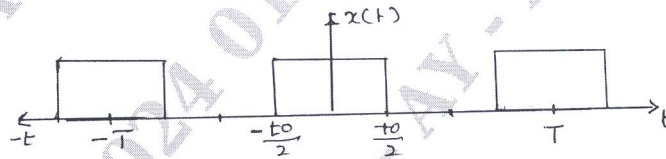


Fig.Q6(b)

(06 Marks)

- c. Find the complex Fourier coefficient for the periodic waveform shown in Fig.Q6(c).

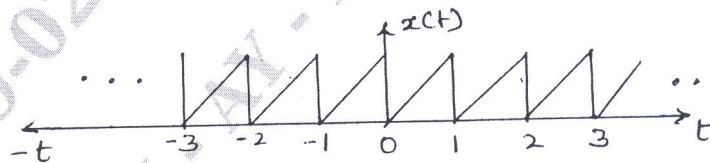


Fig.Q6(c)

(06 Marks)

Module-4

- 7 a. Find the Fourier transform of the signal $x(t) = \delta(t + 0.5) - \delta(t - 0.5)$. (06 Marks)
- b. What is the energy of the signal $x(t) = e^{-\alpha t} u(t)$ and what is its energy in the frequency band $|\omega| \leq 0.5$ rad/sec? (07 Marks)
- c. Find the Fourier transform of a rectangular pulse described as
- $$x(t) = \begin{cases} 1, & 1+1 < a \\ 0, & 1+1 > a \end{cases}$$
- (07 Marks)

OR

- 8 a. Find the DTFT of the sequence $x(n) = \alpha^n u(n)$. Also sketch the magnitude and phase spectrum. (08 Marks)
- b. Find the Fourier transform of $x(t) = e^{-\alpha t} u(t)$. Also sketch the magnitude and phase spectrum. (06 Marks)
- c. State and prove the following properties of Fourier transform :
- Time shift
 - Frequency shift.

(06 Marks)

Module-5

- 9 a. Describe the properties of region of convergence and sketch the ROC of two sided sequence, right sided sequence and left sided sequence. (10 Marks)
- b. Find the z - transform of the following and indicate the region of convergence.
- $x(n) = a^n \cos \Omega_0 u(n)$
 - $x(n) = n a^n u(n)$.

(10 Marks)

OR

- 10 a. Find the inverse Z -transform of the sequence

$$x(z) = \frac{z}{3z^2 - 4z + 1}, \text{ for the following ROCs}$$

- $|z| > 1$
 - $|z| < 1/3$
 - $1/3 < |z| < 1$
- using partial fraction expansion method. (08 Marks)
- b. Using power series expansion technique. Find the inverse z - transform of

$$x(z) = \frac{z}{2z^2 - 3z + 1} \text{ for the following ROCs.}$$

- $|z| < 1/2$
 - $|z| > 1$.
- (06 Marks)
- c. The output of a discrete time LTI system is found to be $y(n) = 2(1/3)^n u(n)$, when the input $x(n)$ is $u(n)$. Find the impulse response $h(n)$ of the system. (06 Marks)
