


CBCS SCHEME

BEC304



Third Semester B.E./B.Tech. Degree Examination, June/July 2024

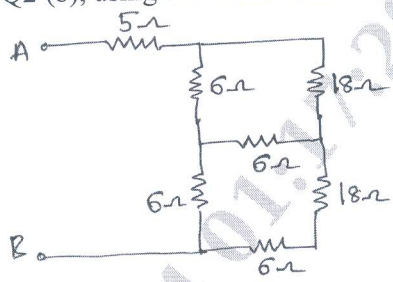
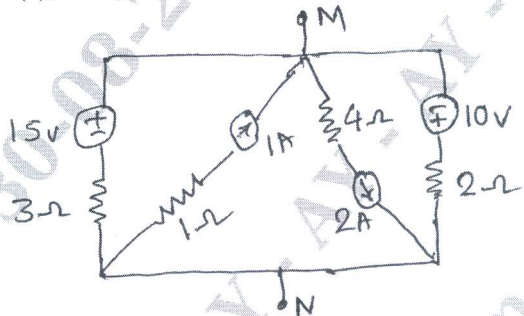
Network Analysis

Time: 3 hrs.


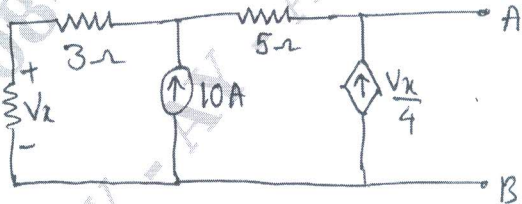
Max. Marks: 100

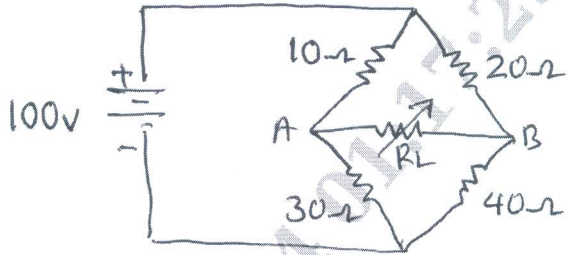
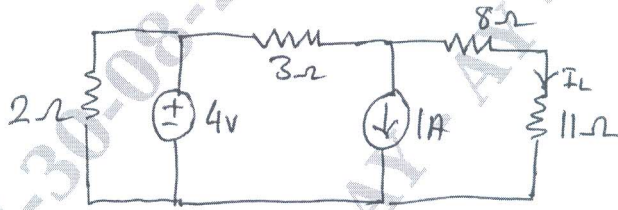
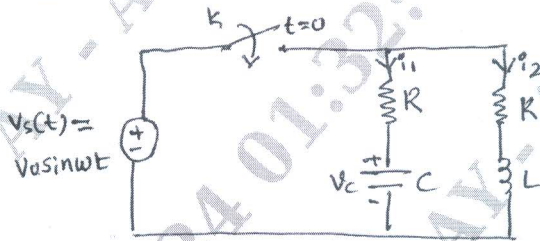
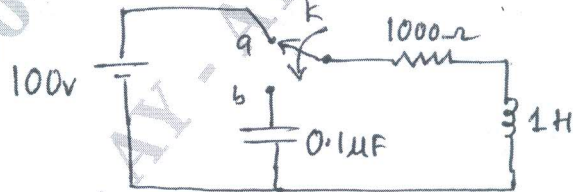
- Note: 1. Answer any FIVE full questions, choosing ONE full question from each module.
 2. M : Marks , L: Bloom's level , C: Course outcomes.

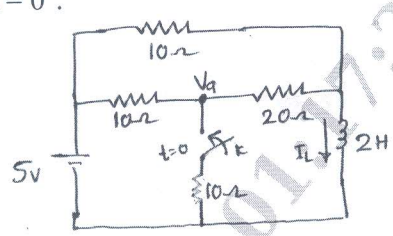
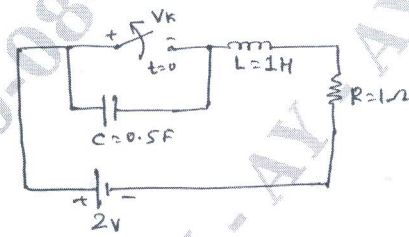

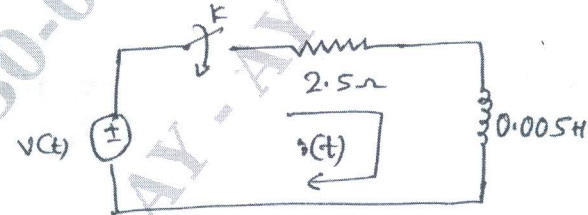
Module - 1		M	L	C
Q.1	<p>a. Reduce the network shown in Fig. Q1 (a) to a single voltage source in series with resistance between terminals A and B. Use source transformation and source shifting technique.</p> <div style="text-align: center;"> <p>Fig. Q1 (a)</p> </div>	10	L3	CO1
	<p>b. Determine voltage V_3 in the circuit shown in Fig. Q1 (b), using loop analysis.</p> <div style="text-align: center;"> <p>Fig. Q1 (b)</p> </div>	10	L3	CO1
OR				
Q.2	<p>a. For the network shown in Fig. Q2 (a), compute all node voltages V_1, V_2, V_3 and V_4 using Node analysis.</p> <div style="text-align: center;"> <p>Fig. Q2 (a)</p> </div>	8	L3	CO1

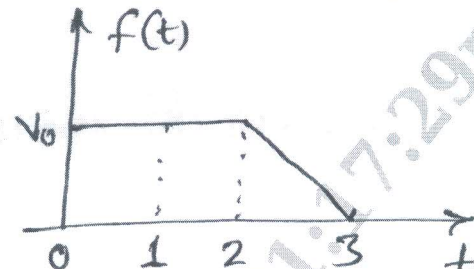
	<p>b. Determine the equivalent resistance between terminal A and B, in the network shown in Fig. Q2 (b), using star Delta transformation.</p>  <p>Fig. Q2 (b)</p>	7	L3	CO1
	<p>c. Find the potential difference between terminals M and N in the network shown in Fig. Q2 (c), using source transformation.</p>  <p>Fig. Q2 (c)</p>	5	L3	CO1

Module - 2

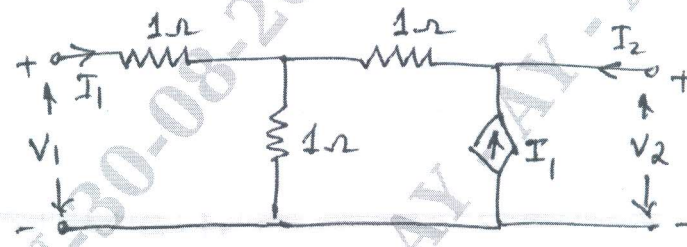
<p>Q.3</p>	<p>a. Determine the voltage across 2Ω resistor in the circuit shown in Fig. Q3 (a), using the super position theorem.</p>  <p>Fig. Q3 (a)</p>	10	L3	CO2
	<p>b. Find Thevenin's equivalent at terminal A and B, in the network shown in Fig. Q3 (b).</p>  <p>Fig. Q3 (b)</p>	10	L3	CO2

OR				
Q.4	a.	<p>Determine the load resistance to receive maximum power from the source. Also find the maximum power delivered to the load in the circuit shown in Fig. Q4 (a).</p>  <p style="text-align: center;">Fig. Q4 (a)</p>	8	L3 CO2
	b.	<p>For the circuit shown in Fig. Q4 (b), determine current I_L using Norton's theorem.</p>  <p style="text-align: center;">Fig. Q4 (b)</p>	8	L3 CO2
	c.	State Millman's theorem.	4	L2 CO2
Module - 3				
Q.5	a.	<p>In the network shown in Fig. Q5 (a), a switch K is closed at $t = 0$. Determine $\frac{di_1}{dt}$, $\frac{di_2}{dt}$ at $t = 0^+$.</p>  <p style="text-align: center;">Fig. Q5 (a)</p>	10	L3 CO3
	b.	<p>In the Network shown in Fig. Q5 (b), the switch K is changed position from a to b at $t = 0$. Solve for i, $\frac{di}{dt}$, $\frac{d^2i}{dt^2}$ at $t = 0^+$. The circuit is reached steady state before switching.</p>  <p style="text-align: center;">Fig. Q5 (b)</p>	10	L3 CO3

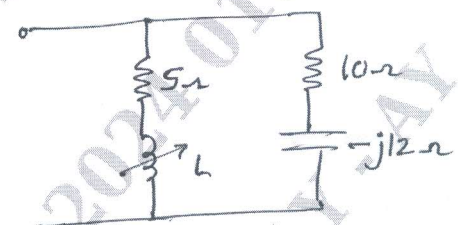
OR			
Q.6	a.	In the network shown in Fig. Q6 (a), steady state has been reached with switch K open. At time $t = 0$, the switch is closed. Determine the value of $V_a(0^-)$ and $V_a(0^+)$ at $t = 0^+$.	10 L3 CO3
		 <p style="text-align: center;">Fig. Q6 (a)</p>	
		 <p style="text-align: center;">Fig. Q6 (b)</p>	
Module - 4			
Q.7	a.	State and prove initial and final value theorem in Laplace transformation.	10 L3 CO3
	b.	Obtain the Laplace transform of the waveform shown in Fig. Q7 (b). Assume that waveform is periodic.	10 L3 CO3
		 <p style="text-align: center;">Fig. Q7 (b)</p>	
OR			
Q.8	a.	In the series RL circuit shown in Fig. Q8 (a), the source voltage is $V(t) = 50 \sin 250t$ V. Using Laplace transform determine the current $i(t)$ when switch K is closed at $t = 0$.	10 L3 CO3
		 <p style="text-align: center;">Fig. Q8 (a)</p>	

	<p>b. Find Laplace transform of the waveform shown in Fig. Q8 (b).</p>  <p style="text-align: center;">Fig. Q8 (b)</p>	10	L3	CO3
--	--	----	----	-----

Module - 5

<p>Q.9</p>	<p>a. Find Z and ABCD parameters for the network shown in Fig. Q9 (a). Also verify whether network is Reciprocal or Symmetrical.</p>  <p style="text-align: center;">Fig. Q9 (a)</p>	10	L3	CO4
	<p>b. A series RLC circuit has a resistance of 10 Ω, an inductance of 0.3 H and a capacitance of 100 μF. The applied voltage is 230 V. Find Resonance frequency, lower and upper cut-off frequencies, current at resonance, current at f₁ and f₂, voltage across inductance at resonance.</p>	10	L3	CO4

OR

<p>Q.10</p>	<p>a. Derive Z-parameters in terms of H parameter.</p>	8	L3	CO4
	<p>b. Find the value of L for which the circuit resonates at frequency of 1000 rad/sec, for the circuit shown in Fig. Q10 (b).</p>  <p style="text-align: center;">Fig. Q10 (b)</p>	7	L3	CO4
	<p>c. Derive the relation between resonating frequency and half power frequencies i.e. $f_r = \sqrt{f_1 f_2}$</p>	5	L2	CO4
